





1. Упореди чега има више или мање и обој:




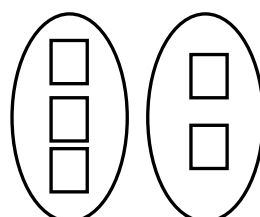
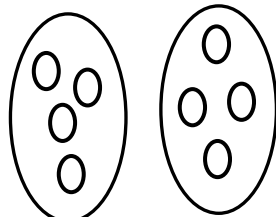



1. Упореди чега има више или мање и обој:







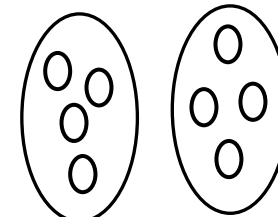

2. Упиши знак > , < или = :

a)



2. Упиши знак > , < или = :

a)



б) 4 ○ 2    5 ○ 5    1 ○ 3

4 ○ 5    2 ○ 2    3 ○ 2

б) 4 ○ 2    5 ○ 5    1 ○ 3

4 ○ 5    2 ○ 2    3 ○ 2